



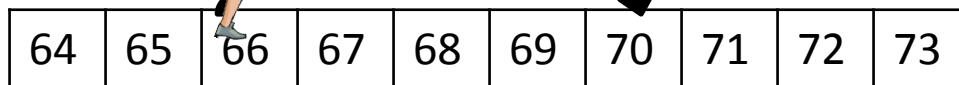
Nombres et calcul

NC.....

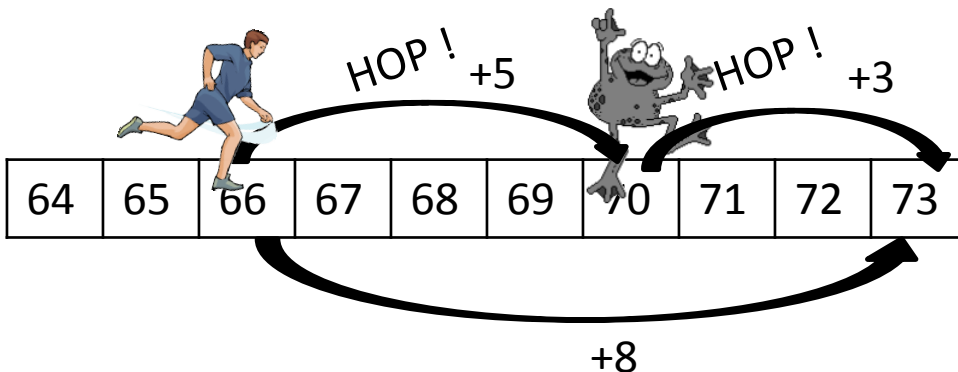


Passer par la dizaine pour calculer un complément

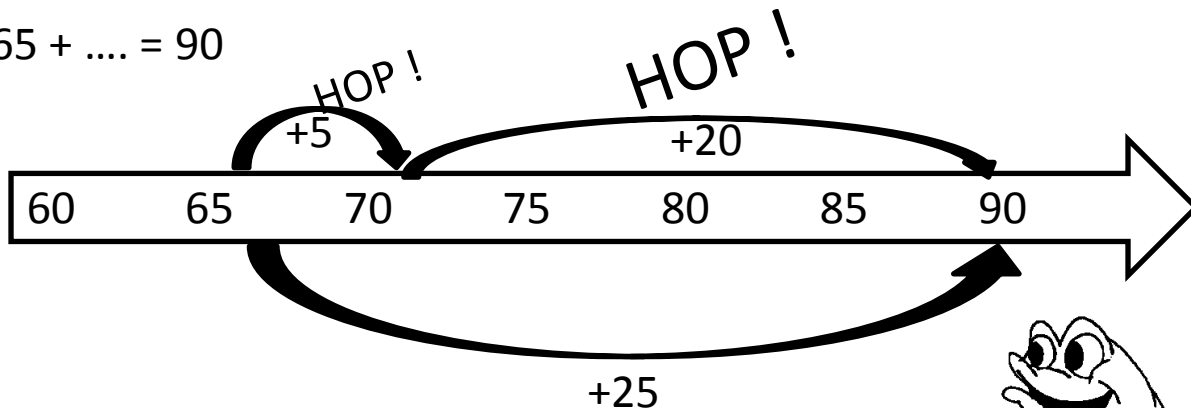
$65 + \dots = 70$



$65 + \dots = 73$




$65 + \dots = 90$



A toi !

Dessine sur ton ardoise si nécessaire .



$55 = 46 + \dots$

$41 = 38 + \dots$

$72 = 59 + \dots$

$82 + \dots = 91$

$68 + \dots = 77$

$74 + \dots = 90$